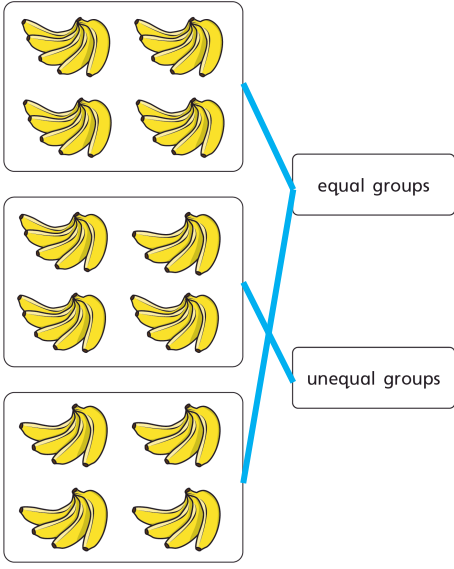
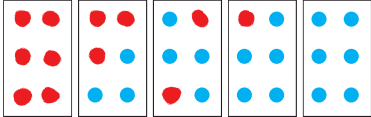
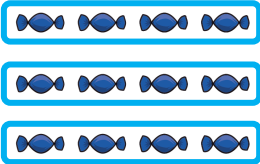
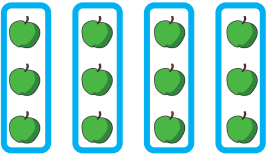


Question	Answer
1	
2	<p>a) There are 3 equal groups of 4</p> <p>b) There are 3 equal groups of 3</p>
3	
4	<p>Mo</p> <p>Mo has 5 cherries in each group. Ron has 5 cherries in one group and 4 cherries in the other.</p>
5	<p>child's equal groups</p>

Y1 – Summer – Block 1 – Step 3 – Add equal groups Answers

Question	Answer
1	There are 5 apples in each bag. There are 4 bags. There are 4 equal groups of 5 There are 20 apples altogether. $5 + 5 + 5 + 5 = 20$
2	$2 + 2 + 2 = 6$ There are 6 sweets.
3	$10 + 10 + 10 = 30$ There are 30 marbles.
4	$2 + 2 + 2 + 2 = 8$ There are 8 candles.
5	a) 8 b) 25
6	There are 35 counters altogether.

Question	Answer
1	 <p>There are 3 rows.</p>
2	 <p>There are 4 columns.</p>
3	<p>a) There are 5 counters in each row.            There are 2 rows.            There are 10 counters altogether.</p> <p>b) There are 2 counters in each column.            There are 5 columns.            There are 10 counters altogether.</p> <p>child's array</p>