

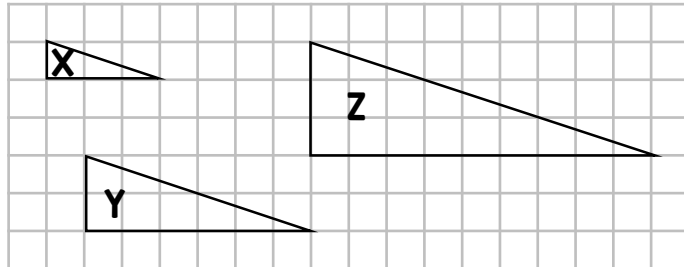
Summer Term Maths Year 10

Enlargement by a positive fractional scale factor

Day
4

Week 8

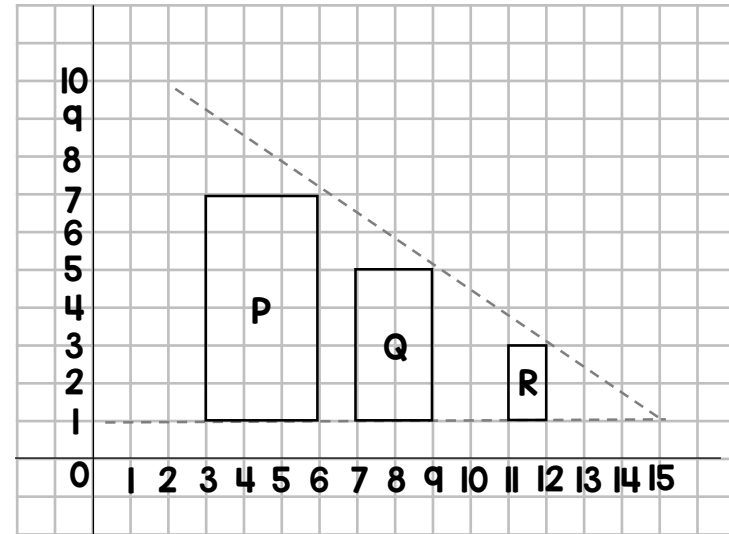
1



Complete this table:

Enlargement		
From	To	Scale factor
X	Y	2
Y	X	$\frac{1}{2}$
X	Z	3
Z	X	$\frac{1}{3}$
Y	Z	$\frac{3}{2}$
Z	Y	$\frac{2}{3}$

2



R is an enlargement of P by scale factor $\frac{1}{3}$ from centre of enlargement (15,1).

(a) Describe the enlargement from Q to R.

(b) Describe the enlargement from Q to P.

a) R is an enlargement of Q by scale factor $\frac{1}{2}$ from centre of enlargement (15,1)

b) P is an Enlargement of Q by scale factor 1.5 from centre of enlargement (15,1)

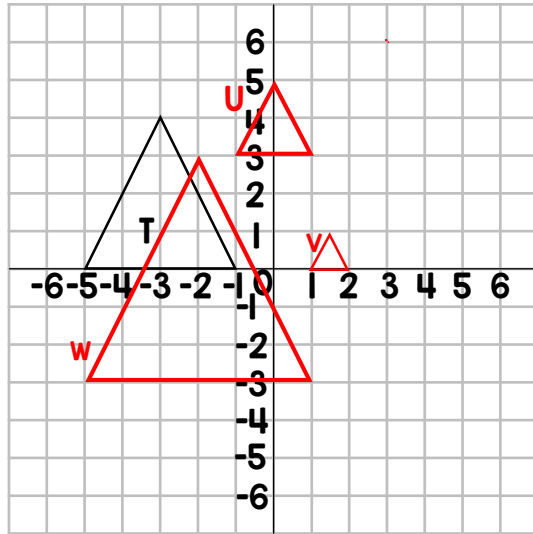
Summer Term Maths Year 10

Enlargement by a positive fractional scale factor

Day
4

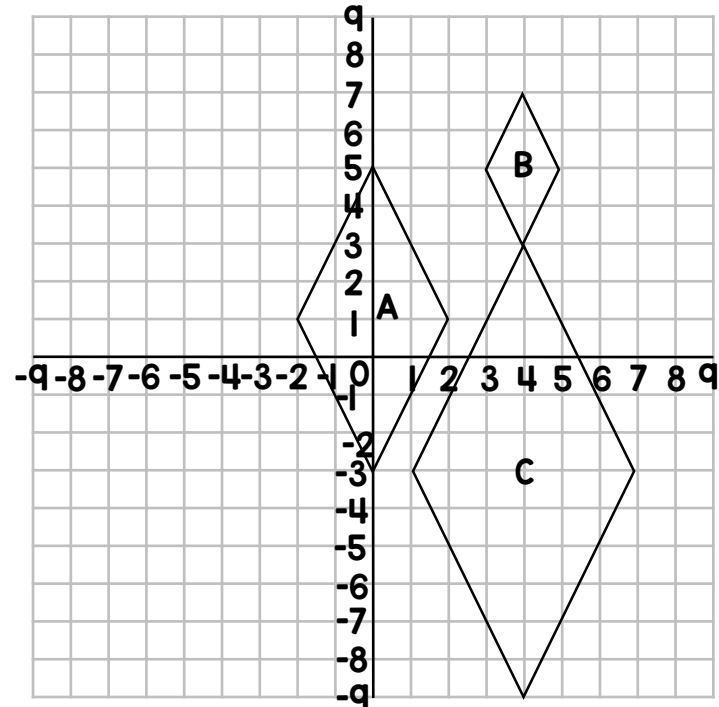
Week 8

3



- (a) Enlarge T by a scale factor $\frac{1}{2}$ from centre (3, 6). Label the new shape U.
- (b) Enlarge T by a scale factor $\frac{1}{4}$ from centre (3, 0). Label the new shape V.
- (c) Enlarge T by a scale factor 1.5 from centre (-5, 6). Label the new shape W.

4



Describe fully the transformation that maps:

- (a) A onto B **Enlargement by SF 0.5 from C.O.E (8, 9)**
- (b) A onto C **Enlargement by SF 1.5 from C.O.E (-8, 9)**
- (c) C onto B **Enlargement by SF 1/3 from C.O.E (4, 9)**
- (d) C onto A **Enlargement by SF 2/3 from C.O.E (-8, 9)**